




# Matie t'apprend




Pour trouver les complémentaires d'un nombre, tu peux utiliser plusieurs stratégies. En voici quelques-unes.

## Les boîtes de 10




$$2 + 8 = 10$$

=




$$8 + 2 = 10$$

## Les dominos




=




$$4 + 7 = 11$$

$$7 + 4 = 11$$



=



$$4 + 8 = 12$$

$$8 + 4 = 12$$

## Le matériel de base 10



+



=



4

+

8

=

12



8

+



4

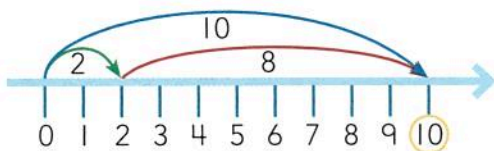
=



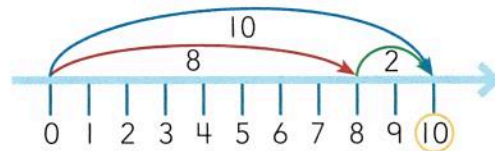
12

## La droite numérique

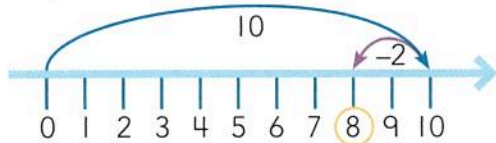
$$2 + 8 = 10$$



$$8 + 2 = 10$$



$$10 - 2 = 8$$



$$10 - 8 = 2$$

